

**MILESTONE ACADEMY**  
**2023 - 2024**  
**VACATION HOME WORK**  
**CLASS – 4**


DATE OF SUBMISSION- 16.06.23

**NOTE:-**

1. The Vacation Home Work is to help your child to be busy . The Work will be assessed after submission.
2. All the work of every subject has to be done in a Single Note Book . Drawings of every subject & Craft Work to be done in the chart papers & stapled together.

**ENGLISH**

1. How was your experience of your first day at school (after the final exams)?
2. Make a list of all names of your family members and underline the vowels in it.
- 3.



4. Every name has a meaning. Do you know the meaning of your name. If no, then find out by taking help from your parents or friends and share it with us.

**5. Have you tried the yummilicious mango shake???!!!**

**This summer try to make mango shake with the help of your mother and write the recipe of it in the boxes given below. It can be a mocktail or a desert also.**



Step 1:

Step 2:

Step 3:

Step 4:

Step 5:



## HINDI

1.

चित्र देखकर व्यंजन लिखो



क  
ख  
घ  
च  
छ  
ज  
झ  
ञ  
ट  
ठ  
ड

2.

चेत्र देखकर सही अक्षर चुनो।



कप

फल

मटर



अदरक

शरबत

नटखट



कप

फल

कलश



आम

माता

बाजा



कप

बादल

माता



कवि

पिता

दिन



3.

‘ओ’ (ी) की मात्रा वाले शब्दों की पहेली

							
	ख	र	गो	श	प	ढो	
	स	ओ	ला	बो	त	ल	
	मो	र	जो	क	टो	री	
	सा	रे	क	ओ	क	रा	
	लो	डि	र	ख	री	गो	
	टा	यो	ग	ली	लो	भी	
							

4.

चित्रों के नाम चुनकर लिखिए -

1.



2.



3.



4.



5.



6.



टमाटर , किला , माचिस , खत , जहाज़ , कान

5. वर्ग पहेली में अ/ आ/ इ/ ई की मात्रा से दिये चित्र देखकर

उनके नाम ढूँढो।




न	ल	म	छ	ली
ग	सी	क	म	ल
आ	म	ना	का	प
दी	प	क	स	ह
ला	ल	गी	छा	ता
प	पी	ता	ही	ली
ड़ि	प	गी	नी	ला








## MATHS

1. Create a model of a house using different solid shapes. A sample house is shown below.



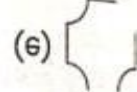

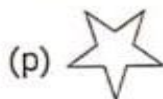
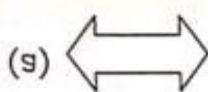
2. Fill the number of faces, sides and vertices of different solid shapes given below. One example has been done for you.

Solid Shape	 Cube	 Cuboid	 Cone	 Sphere	 Cylinder
Number of Vertices	8				
Number of Sides	12				
Number of Faces	6				

3. Count and write the number of faces, sides and vertices for the following objects

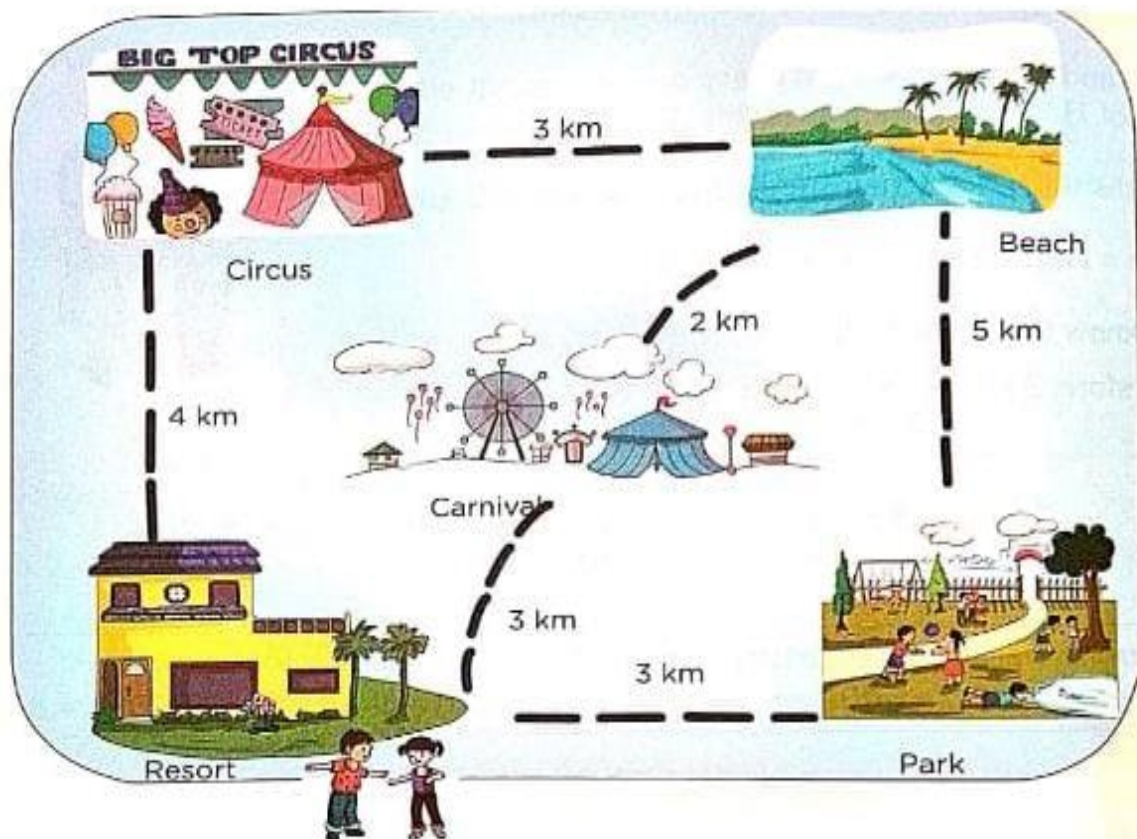


4. Identify the closed figures and colour their interiors





5. Priya and Vishnu are on a vacation. They are staying at the Holiday Resort. Look at the map given below and answer the questions given



- How far is the carnival from the resort? How many metres is that? \_\_\_\_\_
- How far is the circus from the resort? How many metres is that? \_\_\_\_\_
- Which is the shortest route to the beach? How many metres is that? \_\_\_\_\_
- The distance between the resort and the circus is less than the distance between the resort and the park. (True/False)
- The park is at the \_\_\_\_\_ (farthest/nearest) distance and the beach is at the \_\_\_\_\_ (farthest/nearest) distance from the resort.



G.SC

1. Identify the state of each material. Choose whether it is a solid, liquid, or gas.



ice



soy sauce



coffee



honey



sharpener



wind



car smoke




phone



oill

2. Group the food into 'Healthy' or 'Unhealthy' food.



Healthy Food		Unhealthy Food	

When we eat food, the **digestive system** breaks it down into **nutrients** that the body needs.

3 Label the picture.

mouth

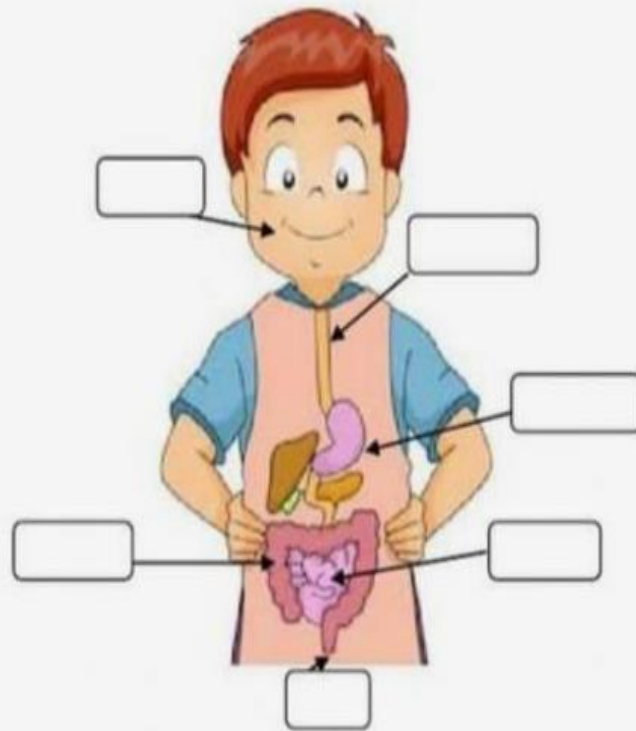
stomach

oesophagus

small intestine

anus

large intestine



4. Order the process of digestion.

☐

The **stomach** breaks the food down into nutrients.

☐

The **oesophagus** pushes the food down to the stomach.

☐

We chew the food with our **teeth**.

☐

The **large intestine** takes waste to the anus.

☐

The waste goes through the **anus**.

☐

The **small intestine** separates the nutrients from the waste and **absorbs the nutrients**. The nutrients pass from the small intestine into the blood, which carries them to all parts of the body.



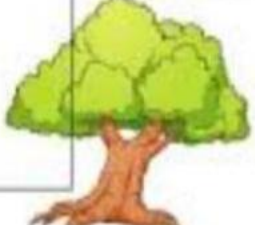
5. Drag the words to the correct place and complete the given sentences.

Living	Non-living	food	grow	water
--------	------------	------	------	-------

- All living things need air, water and \_\_\_\_\_.
- You are a \_\_\_\_\_ thing.
- A \_\_\_\_\_ thing does not move or grow.
- A puppy is a living thing. It can move and \_\_\_\_\_.
- A plant needs \_\_\_\_\_ in order to survive.

➤ Unscramble the given words then write them in the correct column.

1 usb	2 nhe	3 ysot	4 etre
Natural things		Man-made things	

➤ Click the odd one out.


a.	river	sun	mountain	car
b.	bus	pigeon	wall	ball
c.	rose	elephant	lion	monkey



1.

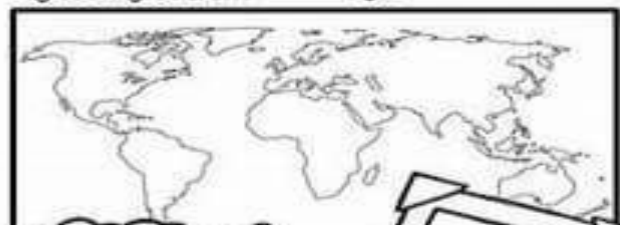
My Country

# Research Report



The Flag

My country is here... By \_\_\_\_\_



My country is: \_\_\_\_\_




The capital is: \_\_\_\_\_

The language is: \_\_\_\_\_

My country is in:

North America	Antarctica
South America	Australia
Africa	Europe
	Asia

Food: \_\_\_\_\_

2.

Look at the picture and answer the following questions –



Q1. Which occupation is being practiced in the above picture?

Ans. \_\_\_\_\_

Q2. Why is it the main occupation of the people of the country? Give two reasons.

Ans. \_\_\_\_\_

Q.3 Write two steps taken by the government to improve the quality of cattle.

Ans. \_\_\_\_\_

Q4. Name any two:

a) Oilseeds : \_\_\_\_\_ , \_\_\_\_\_

b) Spices : \_\_\_\_\_ , \_\_\_\_\_

c) Plantation crops : \_\_\_\_\_ , \_\_\_\_\_

3. Look at the given pictures and fill in the blanks:-



- a) The tricolor is \_\_\_\_\_ in shape. It has \_\_\_\_\_ horizontal bands in different colours \_\_\_\_\_, \_\_\_\_\_ and \_\_\_\_\_.
- Saffron stands for \_\_\_\_\_
- White stands for \_\_\_\_\_
- Green stands for \_\_\_\_\_



सत्यमेव जयते

- b) The national emblem can be seen on government documents, \_\_\_\_\_ and \_\_\_\_\_. The emblem has four \_\_\_\_\_ facing in four \_\_\_\_\_. The base of the emblem has a \_\_\_\_\_ and \_\_\_\_\_.

4. Topic: OUR RICH HERITAGE

India has a rich tradition of art and culture: languages, dresses, dance, music, architecture, paintings and festivals.



A



B



C

Q1. Name the type of dances being performed in the picture.

A \_\_\_\_\_ B \_\_\_\_\_ C \_\_\_\_\_

Q2. What is the difference between folk dance and classical dance?  
Give one example of each.

---

---

---

---

Q3. Circle the odd one out:

- |                 |             |              |           |
|-----------------|-------------|--------------|-----------|
| a) Marathi,     | Japanese,   | Gujarati,    | Assamese  |
| b) Jama Masjid, | Sun Temple, | Red Fort,    | Taj Mahal |
| c) Eid,         | Onam,       | Republic Day | Diwali    |